

**ATOMIC ENERGY CENTRAL SCHOOL – 3, MUMBAI.**

**Periodic Test --1 (July. 2025)**

**CLASS : IV    Sec :\_\_                      Sub.: ENGLISH    Date:\_\_\_\_\_    Time : 1½ hrs.**

**Unique Identification no. : \_\_\_\_\_                      Max Marks:40**

**Invigilator's Sign: \_\_\_\_\_ Examiner's Sign:\_\_\_\_\_ Marks obtained :\_\_\_\_\_**

---

**SECTION A – READING (10 marks)**

**A1. Read the unseen passage and answer the following questions.            (5 marks)**

Meena wakes up early every day. She brushes her teeth, takes a bath, and wears clean clothes. She also helps her mother to clean the house. Meena never throws waste on the ground. She always puts garbage in the dustbin. She washes her hands before and after eating. Meena loves to stay clean and keep her surroundings clean too.

i. Who wakes up early every day?

---

---

ii.     Complete the sentence:

Meena always puts garbage \_\_\_\_\_.

iii.    Write the opposite of “dirty” - \_\_\_\_\_

iv.    Write the plural form of “cloth”. \_\_\_\_\_

v. Tick ☒ the correct habit:

(a) Throwing garbage on the road.

(b) Washing hands before eating

**A2. Read the seen passage and answer the following questions. (5 marks)**

"Chinna, that was not right. Taking something that doesn't belong to you is stealing. How did you feel when you noticed your money was gone?" Kamla asked softly. "I felt very upset and angry!" answered Chinna. Kamla smiled gently and said, "The fruit seller will feel the same way when he finds out that he gave you extra money. Go on now, do the right thing."

Chinna paused and thought about his mother's words. He quickly went back to the fruit seller and returned the extra money. The fruit seller was pleased and said, "You are a truthful and honest boy!"

1. Why was Kamla upset with Chinna?

a) He forgot to buy fruits.

b) He lost his money.

c) He did not return the extra money.

d) He bought too many fruits.

2. Who praised Chinna for being honest?

---

---

3. Write the past tense of the following verbs from the passage:

a) feel → \_\_\_\_\_

b) say → \_\_\_\_\_

4. Pick out a describing word (adjective) used for Chinna in the passage.

---

5. Write a word ending with -ly from the passage. \_\_\_\_\_

**SECTION B – TEXTUAL QUESTION (6 marks)**

**B1. Answer the following questions in a complete sentence. (2)**

a) Why is helping each other important?

---

---

---

b) What did the fruit seller do by mistake?

---

---

---

**B2. State true or false. (4)**

- i. The fruit seller gave Chinna twenty rupees extra as change. \_\_\_\_\_
- ii. Chinna decided to keep the extra money and bought chocolates with it. \_\_\_\_\_
- iii. You should always walk on the footpath. \_\_\_\_\_
- iv. You should use the zebra crossing to cross the road. \_\_\_\_\_

**SECTION C – CREATIVE WRITING (5 marks)**

**C1. Look at the given picture and write five sentences about the picture. (5)**



---

---

---

---

---

---

---

**SECTION D – GRAMMAR (6 marks)**

**D1. Do as directed. (2)**

**a) Fill in the blanks using the correct comparison form. (-er or -est)**

1. An ant is (small) \_\_\_\_\_ than an elephant.
2. Jay was the (fast) \_\_\_\_\_ person in the race.

b) Classify the following into countable and uncountable nouns. (3)

(Pollution, Cars, Speed, Bicycle, Buses, Safety)

Countable Nouns	Uncountable nouns

c) Classify the following as “C” (Countable) and “U” (Uncountable). (1)

i. Bananas \_\_\_\_\_ ii. Coffee \_\_\_\_\_

### SECTION E – VOCABULARY (6 marks)

E1. Fill in the blanks with suitable words from the box: (3)

(swarm , bundle , pack)

a) A \_\_\_\_\_ of sticks. b) A \_\_\_\_\_ of wolves.

c) A \_\_\_\_\_ of bees.

E2. Circle the word that means the opposite of the highlighted word. (2)

i. Chacha showed him some **beautiful** tinkling bells.

(a) Attractive (b) Ugly (c) Broken

ii. I'll give you money to **buy** the bells.

(a) Sell (b) Purchase (c) Order

E3. Frame sentence using the following word. (1)

Smiling - \_\_\_\_\_

## **SECTION F – SPELLINGS (4 marks)**

**F1. Write the missing letters to form meaningful words. (2)**

i) F O \_ \_ T P \_ \_ T H

ii) T \_ \_ \_ E T \_ \_ E R

**F2. Circle the correct spelling. (2)**

i) scuted          shouted          shuoted

ii) praised          prased          parised

## **SECTION G – HANDWRITING (3 marks)**

**G1. Write the given lines in neat and clean handwriting.**

Values are the good things we learn and follow in life. They help us become kind, honest, and respectful people. Saying "please" and "thank you", listening to others, helping someone in need, and telling the truth are all good values. These habits make us better friends, students, and family members. When we practice good values every day, we grow into good human beings.

---

---

---

---

---

---

---

परमाणु ऊर्जा केन्द्रीय विद्यालय - 3, मुंबई

सामयिक परीक्षा - 1 (2025-26) जुलाई

कक्षा - चार वर्ग - -----

हिंदी

समय - डेढ़ घंटे

अद्वितीय परीक्षा क्रमांक - -----

दिनांक - -----

ह.निरीक्षक - ----- ह.परीक्षक - ----- प्राप्तांक ----- पूर्णांक- 40

प्रश्न 1. नीचे दिए गए अनुच्छेद को पढ़कर पूछे गये प्रश्नों के उत्तर लिखो ।

बगीचे की दीवार में एक छेद था। घोंघा प्रतिदिन उस छेद को देखता था। उसे याद आता था कि उसकी माँ उससे कहा करती थीं, "वहाँ कभी मत जाना। वह दुनिया हमारी दुनिया से बहुत अलग है।" घोंघा कुछ और दिन सोचता रहा। फिर उसने तय कर लिया, "मैं बाहर जाकर देखूँगा कि दुनिया कैसी है।" यह सोचकर उसने अपना सामान अपने शंख में बाँध लिया। अगले दिन सूरज निकलने के पहले ही घोंघा निकल पड़ा। बगीचा पीछे छोड़ दिया। घोंघा छेद में घुसा और जल्दी ही बाहर निकल आया। बाहर आते ही घोंघा चकित रह गया। जितनी दूर तक उसकी आँखें देख सकती थीं, उतना उसने देखा। उसके सामने बहुत बड़ा, लंबा और चौड़ा-सा मैदान था।

1). घोंघा किसे देखकर सोचता रहता था?

(1)

क) बगीचे के फूल

ख) दीवार में बना छेद

ग) एक बड़ा पेड़

घ) अपनी माँ को

2). घोंघा ने अपना सामान कहाँ बाँधा?

(1)

क) अपने पैर में

ख) अपने शंख में

ग) एक थैले में

घ) पेड़ की डाली पर

3). घोंघा की माँ ने उसे क्या सलाह दी थी? (2)

4). विलोम शब्द लिखो । (क) अंदर- \_\_\_\_\_ (1)

**प्रश्न 2. दिये गये पादयंश को पढ़कर निम्नलिखित प्रश्नों का उत्तर लिखिए ।**

लहरता-बलखाता नीम, दिनभर हँसता-गाता नीम ।

चिड़िया, कौआ, तोता सबसे, अपना नेह जताता नीम ।

नहीं डॉक्टर फिर भी देखो, कितने रोग भगाता नीम ।

चले प्रदूषित वायु कभी तो, उसको शुद्ध बनाता नीम।

क). नीम किन जीवों से अपना प्यार जताता है? (2)

-----

-----

ख). कौन प्रदूषित हवा को शुद्ध बनाता है? (1)

-----

-----

ग) . समान तुक वाले शब्द लिखो । (1)

भगाता - \_\_\_\_\_



घ). दिए गए शब्द को जोड़कर नए शब्द बनाए।

(1)

प्र +दूषित = \_\_\_\_\_

( पाठ्यपुस्तक के प्रश्न )

प्रश्न 3. नीचे दिए गए प्रश्नों के उत्तर लिखे ।

क). चिड़िया को यह संसार कब-कब छोटा लगा?

(2)

---

---

ख). नीम से किन - किन रोगों में लाभ हो सकता है? दो के नाम लिखिए ।

(2)

\_\_\_\_\_

\_\_\_\_\_

ग). एक शब्द में उत्तर लिखो।

(3)


1. चिड़िया अपना घोंसला \_\_\_\_\_ तिनकों से बनाती है। ( गीला/ सूखे )

2. “ वाह ! दुनिया तो कितनी \_\_\_\_\_ है” घोंघे ने कहा । ( मजेदार / खराब )

3. जाती हूँ मैं हर जगह , पर हिलती नहीं किसी भी तरह \_\_\_\_\_ ( सड़क /मोर )

( रचनात्मक लेखन अंक -5 )

प्रश्न 4. दिए गए चित्र के बारे में पाँच वाक्य लिखो ।



---

---

---

---

---

---

---

(व्याकरण)

प्रश्न 5. विलोम शब्द लिखो ।

(2)

दूर x \_\_\_\_\_

ऊपर x \_\_\_\_\_

प्रश्न 6. वचन बदलो ।

(2)

घोंघा - \_\_\_\_\_

तिनका - \_\_\_\_\_

प्रश्न 7. दिए गए शब्दों को जोड़कर नए शब्द बनाओ ।

(2)

क) सु + योग = -----

ख) सु + कर्म = -----

( शब्दावाली )

प्रश्न 8 . सही शब्दों पर गोला लगाओ ।

(2)

क) संख

शंख

शन्ख

ख) दुनिए

दुनीया

दुनिया

प्रश्न 9. दिए गए शब्दों से वाक्य बनाओ ।

(2)

अचानक - -----

सुंदर- -----

( वर्तनी )

प्रश्न 10. इनकी ध्वनियाँ कैसी होंगी -

(1)

क) पानी का बरसना - -----

प्रश्न 11. दिए गए अक्षरों से सार्थक शब्द बनाइए ।

(2)

गि / री /ह/ ल = -----

ब / चा / गी = -----

सफलता का स्वाद तब ही मीठा लगता है जब हमने उसके लिए कठिन परिश्रम और संघर्ष किया हो। सफलता हमें गर्व और संतोष का अनुभव कराती है। यह हमारे आत्मविश्वास को बढ़ाती है और हमें और भी बड़े लक्ष्यों की प्राप्ति के लिए प्रेरित करती है।

---

---

---

---

---

---

---

---

---

---

**ATOMIC ENERGY CENTRAL SCHOOL – 3, MUMBAI.**

**Periodic Test --1 (July. 2025)**

**CLASS : IV    Sec :\_\_                      Sub.: MATHS    Date:\_\_\_\_\_    Time : 1½ hrs.**

**Unique Identification no. : \_\_\_\_\_                      Max Marks:40**

**Invigilator's Sign: \_\_\_\_\_ Examiner's Sign:\_\_\_\_\_ Marks obtained : \_\_\_\_\_**

---

**Section A- Knowledge (10 marks)**

**Q.1) Choose the correct answer & fill in the blanks. (1 x 2)**

a. A circle has \_\_\_\_\_ center.                      ( 4,    1,    2 )

b. An object that looks like a cone is \_\_\_\_\_ .  
( bottle   ,   book   ,   birthday cap )

**Q.2. Answer the following questions. (2 x 2)**



**a) State true or false.**

i) Radius is half of diameter.                      \_\_\_\_\_



ii) Acute angles are more than a right angle.                      \_\_\_\_\_

**b) Write the name of two objects that looks like the given 3-D shapes.**

**SPHERE –**




**CUBOID -**



**Q.3) Draw lines and join the picture with the correct view.**

**(1 x 4)**



**FRONT VIEW**

**SIDE VIEW**

**BACK VIEW**

**TOP VIEW**

**Section B – Understanding (10 marks)**

**Q.4) Choose the correct answer.**

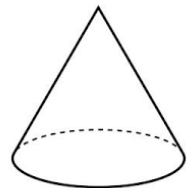
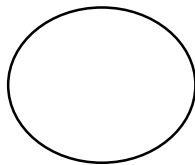
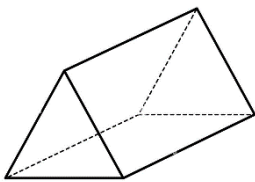
**(1 x 2)**

- i) An angle is formed when two \_\_\_\_\_ meet. ( circles / lines )
- ii) All numbers in the times-2 table are \_\_\_\_\_. ( even / odd )


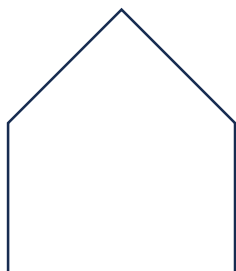
**Q.5) Answer the following questions.**

**(2 x 2)**

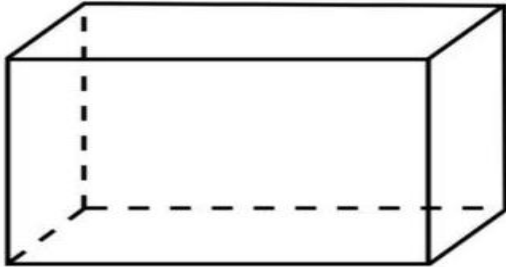
- a.** Colour the shapes that have the same opposite faces.



- b) Draw two lines to split each of the given shapes into 3 triangles.**



**Q.6 i) Count and write the number of faces (F) , corners (V) and edges (E) of the following shape. (1 x 4)**



Faces (F)	
Corners (V)	
Edges (E)	

**ii) Prove that**

$$\mathbf{F + V - E = 2}$$

### **Section C - Ability to compute (10 marks)**

**Q.7) Choose the correct answer.**

**( 1 x 2 )**

a) Which of the following is an odd number?

- i) 7      ii) 18      iii) 6      iv) 12

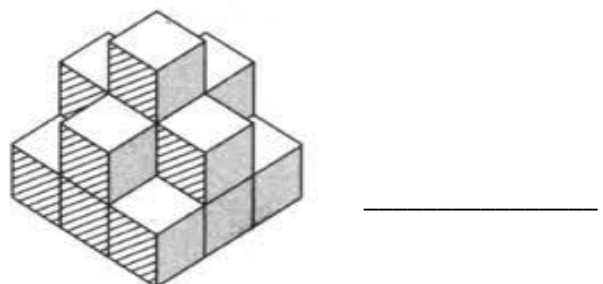
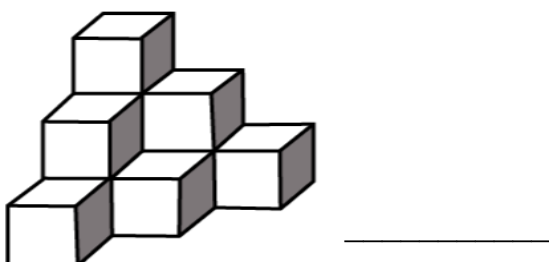
b) The top view of a  is a \_\_\_\_\_ .

- i) triangle      ii) pentagon      iii) circle      iv) rectangle

**Q.8) Answer the following questions.**

**(2x2)**

**a) Count the number of cubes in the following pictures.**




**(b) Circle the odd one.**

i) Cone                  Cube                  Circle                  Cylinder

ii) Square                  Rectangle                  Rhombus                  Triangle

**Q.9) a)** In the figure given below, mark the acute angles in red, right angles in green and obtuse angles in blue. **(3 + 1)**



(b) How many angles are there in all ? \_\_\_\_\_

**Section D - Problem Solving (10 marks)**

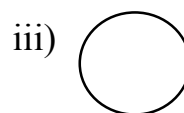
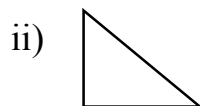

**Q.10) Fill in the blanks.**

**(1x2)**

a. If the radius of a circle is 5 cm., the diameter will be \_\_\_\_\_.

i) 10 cm                  ii) 15 cm                  iii) 12 cm                  iv) 20 cm

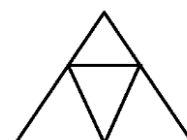
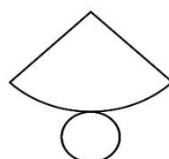
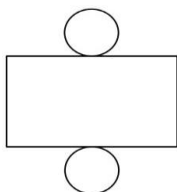
b. Which of the following shape does not have a right angle?



**Q.11) Do as directed.**

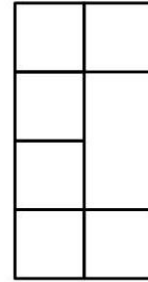
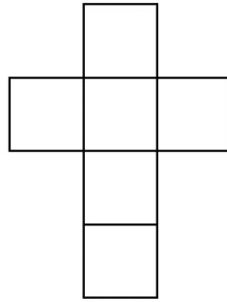
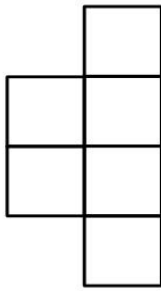
**a) Circle the correct net of a cylinder.**

**( 1)**





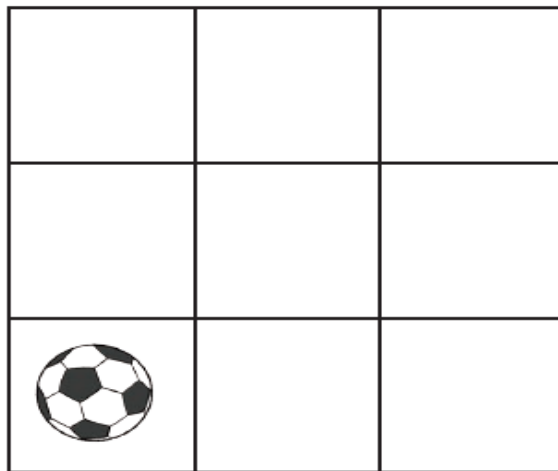
(b) Which of the following can be folded to get a cube? Colour it. (1)



Q.12) Circle all the even numbers given in the box. (2)

4	17	9	10	16	11	12
---	----	---	----	----	----	----

Q.13) Look at the box and answer the given questions. (1 x 4)



- The ball is at the bottom \_\_\_\_\_ corner. (left / right)
- Draw an apple at the top right corner.
- Draw a tree in the middle of second row and second column.
- Draw a car at the bottom right corner.

**ATOMIC ENERGY CENTRAL SCHOOL – 3, MUMBAI.**

**Periodic Test --1 (July. 2025)**

**CLASS : IV    Sec :\_\_                      Sub.: EVS    Date:\_\_\_\_\_    Time : 1½ hrs.**

**Unique Identification no. : \_\_\_\_\_                      Max Marks:40**


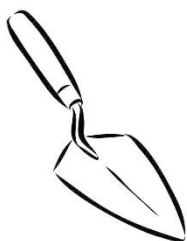
**Invigilator's Sign: \_\_\_\_\_ Examiner's Sign:\_\_\_\_\_ Marks obtained :\_\_\_\_\_**

---

**I. Choose the correct answer and fill in the gaps. (1 X 5 = 5M)**

- 1) A \_\_\_\_\_ is a person who repairs and makes walls and buildings.  
(carpenter / mason)
- 2) A spectacled monkey is the state animal of \_\_\_\_\_. (Assam / Tripura)
- 3) A \_\_\_\_\_ has a long narrow and pointed snout to catch fish. (Gharial / Hornbill)
- 4) Most of the insects have \_\_\_\_\_ pairs of legs. (six / three)
- 5) The \_\_\_\_\_ river flows in Chattisgarh. (Chinar / Jhelum)

**II. Identify the picture and name it. (1 X 3 = 3M)**



\_\_\_\_\_

**III. Match the following. (1 X 4 = 4M)**

- |                            |                          |
|----------------------------|--------------------------|
| 1) a type of communication | Automated teller machine |
| 2) has sharp eyes          | Bhela Ghar               |
| 3) a hut of bamboo and hay | Internet                 |
| 4) ATM                     | Owls                     |

**IV. Name of the following. (2 X 3 = 6M)**

- 1) Two insects with wings - \_\_\_\_\_ , \_\_\_\_\_
- 2) Two special features of turtles - \_\_\_\_\_ , \_\_\_\_\_
- 3) Two types of communications in earlier times - \_\_\_\_\_ , \_\_\_\_\_

**V. Write True or False. (1 X 5 = 5M)**

- 1) Magh Bihu is celebrated on 14<sup>th</sup> November. (                      )
- 2) In Sikkim, the specialists in agriculture are called Khetala. (                      )
- 3) People drop letters in the post office. (                      )
- 4) We find constables in a fire station. (                      )
- 5) Pachmarhi is in Madhya Pradesh. (                      )

**VI. Answer in short. (2 X 3 = 6M)**

- 1) Why do we live in a community?

---

---

---

---

- 2) Write four rules to be followed during nature trail.

---

---

---

---

3) What is a map?

**VII. Write four sentences about the Bihu festival.**

**(1 X 4 = 4M)**

**VIII. Answer in one sentence.**

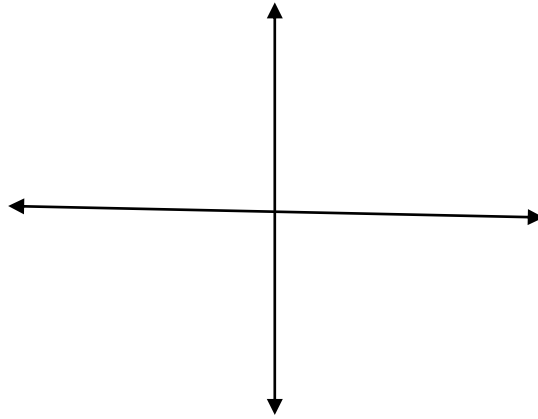
**(1 X 2 = 2M)**

1) What is a Barter system?

2) What is the other name of Van Mahotsav?

**IX. Name the directions.**

**(1 X 2 = 2M)**




**X. Draw the following things neatly:**

**(1 X 3 = 3M)**

1) beak of a parrot



2) claws of a duck



3) footprint of a crow

